






### 4. TIME NAMES OF NOTES EXERCISES (UK)

1. Match the notes with their time names.

Semibreve	Minim	Crotchet	Quaver	Semiquaver
				






2. Answer the questions. The first one has been done for you as an example.

- How many semiquavers is a quaver worth?   2
- How many quavers is a minim worth?
- How many minims is a crotchet worth?
- How many semiquavers is a crotchet worth?
- How many quavers is a semibreve worth?

3. Copy this melody as neatly as you can.

#### 4. TIME NAMES OF NOTES EXERCISES (USA)

1. Match the notes with their time names.

Whole note	Half note	Quarter note	Eighth note	Sixteenth note
				

2. Answer the questions. The first one has been done for you as an example.

- How many sixteenths is an eighth worth?   2
- How many eighths is a half note worth?
- How many half notes is a quarter note worth?
- How many sixteenths is a quarter note worth?
- How many eighths is a whole note worth?

3. Copy this melody as neatly as you can.